

Assessment, Part 1

Circle the choice that correctly completes the sentence.

- 1** A bird's _____ is an adaptation for eating.

feet

beak

feathers

- 2** Plants make food in their _____.


leaves

roots

seeds

Answer the question.

- 3** Write two ways to tell where the toad is. Use the words in the box.



in the cup

behind the cup

under the leaves

in the terrarium

Assessment, Part 2



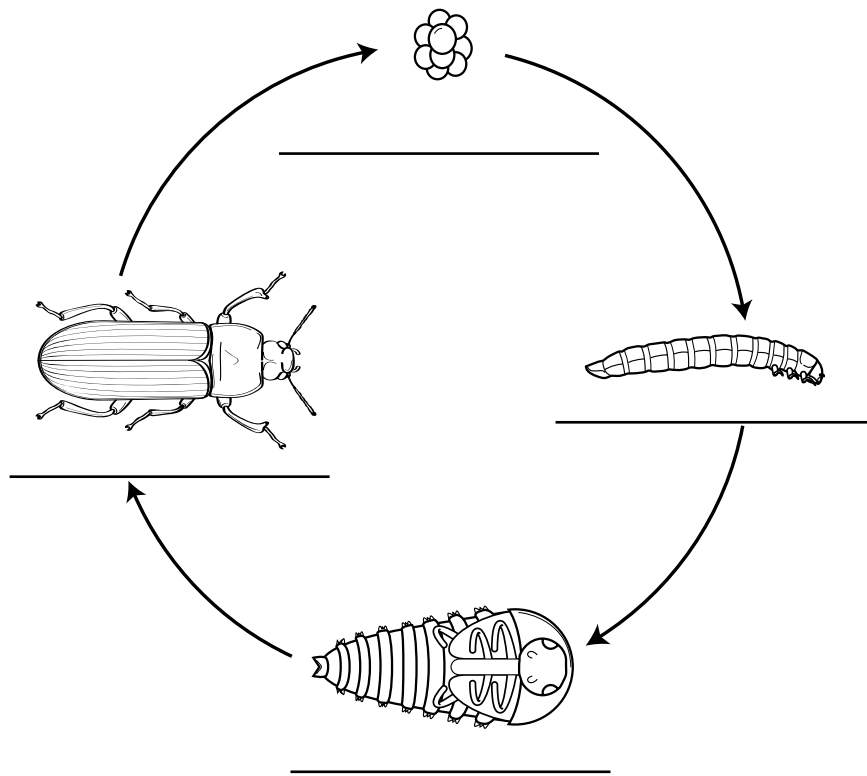
- 4** Look at the life cycle of a mealworm. Write the name of each stage on the line next to its picture. Use the words in the box.

pupa

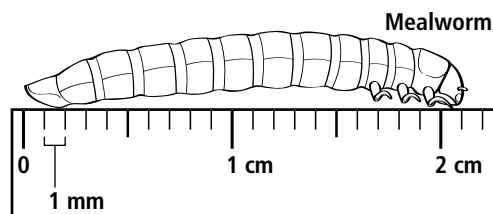
larva

adult

egg



- 5** How long is this mealworm?



The mealworm is _____ mm long.

Assessment, Part 3



Materials:

- | | | | |
|---|--------------------------|-----|---------------|
| 1 | bottle with red water | 1 | plastic spoon |
| 1 | clothespin | 1 | plastic straw |
| 1 | paper towel | 3–5 | raisins |
| 1 | plastic peanuts in water | | |

Use each tool to pick up each food.

6 Which tool is best for picking up each food?

clothespin _____

straw _____

spoon _____

7 Which tool is like each bird's beak?

